









1. Which one of the following figures is NOT an Output Device?

- A)  Printer
- B)  Monitor
- C)  Speaker
- D)  Scanner





2. A computer needs \_\_\_\_\_ to work.

- A) Air
- B) Food
- C) Electricity
- D) Fan





3. Which one is a light weight and compact Computer.

- A)  Laptop
- B)  Monitor
- C)  Computer
- D)  CPU





4. Which one of the following devices helps you to listen to music using Computer?

- A)  Speaker
- B)  Microphone
- C)  Monitor
- D)  Joystick





5. Which one of the following is commonly used in CPU to connect different parts?

- A)  CD-ROM
- B)  Printer
- C)  Data Cable
- D)  Scanner





6. Computer has three essential parts. Which one of the following is NOT an essential part?

- A)  Keyboard
- B)  Monitor
- C)  Joystick
- D)  CPU

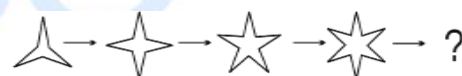
7. Steve has to type his name in the computer. Which one of the following parts of computer will help him to type his name?

- A)  Mouse
- B)  Monitor
- C)  Keyboard
- D)  CPU

8. \_\_\_\_\_ is to \_\_\_\_\_ as \_\_\_\_\_ is to: \_\_\_\_\_

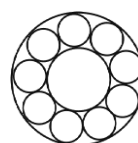
- A)  Hand
- B)  Foot
- C)  Camera
- D)  Person

9. Which one would be next figure in the sequence?




- A)  B)  C)  D) 

10. How many circles are there in the given figure?

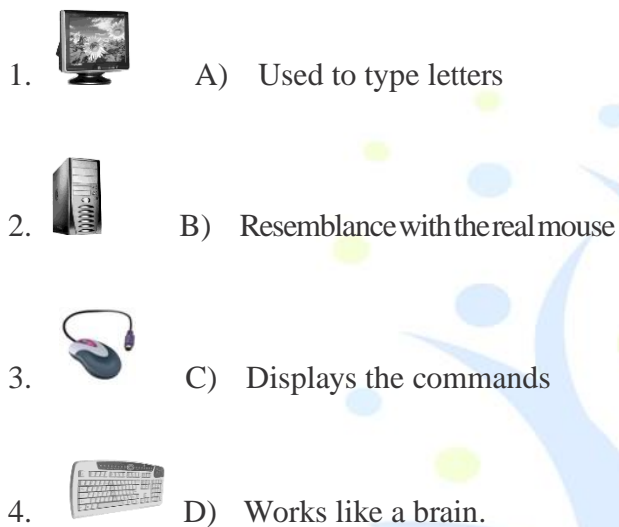


- A) 9 B) 10 C) 11 D) 12

11. In computing, which one of the following is a device that optically scans images, printed text, handwriting or an object and converts it into a digital image?



12. Given below the figures of the parts of a computer. Match them correctly with the details given on the other side.



- A) 1 → D, 2 → C, 3 → B, 4 → A
- B) 1 → A, 2 → B, 3 → C, 4 → D
- C) 1 → C, 2 → A, 3 → B, 4 → D
- D) 1 → C, 2 → D, 3 → B, 4 → A

13. Which of the following is called the pointing device?

A. Keyboard      B. Mouse  
C. CPU      D. Monitor

14. Which of the following is called the brain of a computer?

A) ALU      B) Memory  
C) CPU      D) Control Unit

15. CD-ROM stands for

A) Compact Disk Random Access Memory  
B) Compact Disk Read Only Memory  
C) Common Disk Read Only Memory  
D) Compact Data Random Access Memory

16. Which of the following is/are the correct statements?

1. Clicking the mouse implies clicking left button of the mouse.  
2. Right click implies pressing and releasing the right mouse button once.  
3. The right mouse button is never double-clicked.

A) Only 1 is correct  
B) Both 2 and 3 are correct  
C) Both 1 and 2 are true  
D) All the statements are correct

17. The keys used to insert letters like A, B, C etc. are called .....

A) Special keys  
B) Alphabet keys  
C) Navigation keys  
D) Function keys


18. Which figure fits next in the sequence given below?

Question Figure:  :  ::  : 

A)  B)  C)  D) 

19. Fill in the empty box above with the correct picture from below.



A)  B)  C)  D) 

20. Which of the following is/are correct about a computer mouse?

A) It looks like a real mouse.  
B) It can run and eat like a real mouse.  
C) It is an input device.  
D) Both A and C