





1. Consider the following figure:

- (i) 
- (ii) 
- (iii) 
- (iv) 

Which one of the following is/are the input device(s)?

- (A) Both (i) and (ii)  
 (B) (i), (ii) and (iii)  
 (C) (i), (ii) and (iv)  
 (D) All of above

2. How many keys are there on a standard keyboard?

- (A) 97  
 (B) 82  
 (C) 104  
 (D) 136

3. In which one of the following generations of computers the technology of integrated circuits was introduced?

- (A) 1st Generation  
 (B) IInd Generation  
 (C) IIIrd Generation  
 (D) IVth Generation

4. In Windows 10, the first screen we see, after booting up the computer, is called :

- (A) Background Screen  
 (B) Desktop  
 (C) Wallpaper  
 (D) Home Page

5. To get \$ sign, you should press :

- (A) Shift + 3                      B) Shift + 4  
 (C) Shift + 5                      D) Shift + 6

6. Which of the following is the longest keyboard?

- A. Enter  
 B. Space bar  
 C. Back Space  
 D. Tab

7. Fill in the Blanks:





1. \_\_\_\_\_ is a text based input device that allows the user to interact with the computer.  
 2. The \_\_\_\_\_ is a small device used to point to a particular place on the screen.  
 3. A \_\_\_\_\_ is an input device consisting of a large pointed stick and input buttons on it.

- (A) Joystick, mouse and keyboard  
 (B) Joystick, keyboard and mouse  
 (C) Keyboard, joystick and mouse  
 (D) Keyboard, mouse and joystick





8. The process of starting a Computer is called Booting. What is cold Booting?

- (A) Start the computer first time by main switch  
 (B) Restart the computer by Ctrl + Alt + Del keys  
 (C) Switch on the button on the monitor  
 (D) Switch on the power switch on CPU

9. Find out which figure is different from other three.

- (A)  (B)   
 (C)  (D) 

10. Find out which figure is different from other three.

- (A)  (B)   
 (C)  (D) 

11. Windows 10 is what type of software?

- (A) Utility Software  
 (B) Application Software  
 (C) System Software  
 (D) Package

12. Steve is working in MS-Paint. He wants to select any irregular shape or part of the picture. Which of the following tool he should use?

- (A) Free-From Select      (B) Select  
 (C) Eraser                      (D) Fill with color

**13. Which of the following is/are correct statement(s) about Speaker?**

*Speaker?*

1. Speaker is used to convert the electronic signal into audio signal.
2. Speaker is used to convert the audio signal into electronic signal.

(A) Only 1 (B) Only 2  
(C) Both 1 and 2 (D) Both are False

**14. Match the following:**

- |          |                           |
|----------|---------------------------|
| 1. RAM   | i. Rewritable memory chip |
| 2. ROM   | ii. ritten only once      |
| 3. PROM  | iii. Volatile             |
| 4. EPROM | iv. Non-volatile          |

- (A) 1 → iii; 2 → iv; 3 → ii; 4 → i  
(B) 1 → iv; 2 → iii; 3 → ii; 4 → i  
(C) 1 → i; 2 → ii; 3 → iii; 4 → iv  
(D) 1 → ii; 2 → i; 3 → iv; 4 → iii

**15. Which of the following is the correct descending order according to their storage capacity?**

- (A) CD>DVD>HDD  
(B) HDD>CD>DVD  
(C) HDD>DVD>CD  
(D) DVD>HDD>CD

**16. In MS-Word 2013, to select a sentence, click anywhere at the sentence by holding**

- (A) Ctrl key (B) Shift Key  
(C) Home Key (D) End Key





**17. MS-Paint creates which of the following type of image?**

- (A) Vector processing  
(B) Squares and circles  
(C) Bitmap graphics  
(D) Line and areas

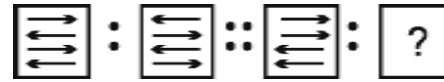
**18. System software includes \_\_\_\_\_.**




- (A) Operating system (B) Device driver  
(C) BIOS (D) All of these

**19. Find out which figure is different from other three.**

- (A)  (B)   
(C)  (D) 

**20. Which figure would fit in the question mark?**



- (A)  (B)   
(C)  (D) 